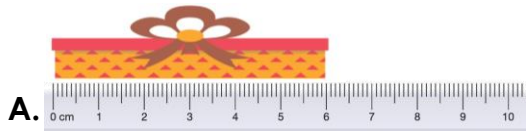
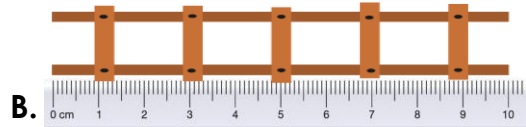


Measure Length


1. Match the measurement to the toy object.



6 cm



9 cm



10 cm


Not to scale

VF

2. How long are these objects in centimetres?



_____ cm




_____ cm

Not to scale

VF

3. Adam draws two 4 cm lines. He starts at the arrows. What numbers will he finish at?



_____ cm



_____ cm

Not to scale

VF

4. Mariam and Alex are measuring the length of a straw.



Not to scale

Mariam says,



This straw is 7 cm long.

Alex says,



This straw is 8 cm long.

Who is correct? Explain your answer.

R

5. Taylor's highlighter pens measure between 5 cm and 11 cm.


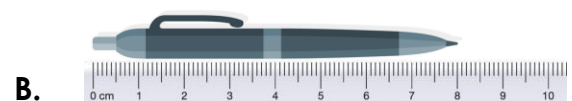
What are the possible measurements his pens could be?



Not to scale

PS

6. Find Sam's mistake and explain what he has done wrong.



Not to scale

R

Measure Length

1. A. 6 cm; B. 10 cm; C. 9 cm
2. A. 4 cm; B. 8 cm
3. A. 10 cm; B. 6 cm
4. Mariam is correct. She has seen that one end of the straw is lined up with the 0 cm mark on the ruler and that the other end reaches the 7 cm mark.
5. 6 cm; 7 cm; 8 cm; 9 cm; 10 cm
6. C is incorrect. Sam has not lined the end of the pen up with the 0 cm mark on the ruler. This means his measurement will be wrong.