
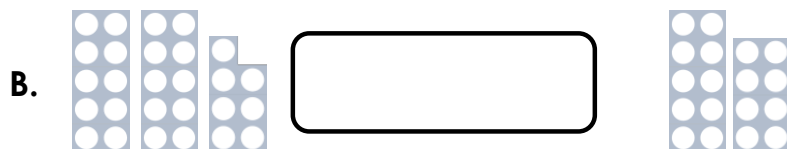


Compare Objects Within 50

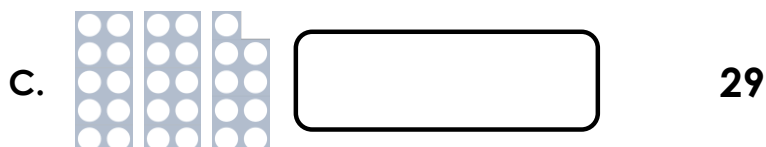
1. Use the word cards to make each statement correct.



is more than



is less than

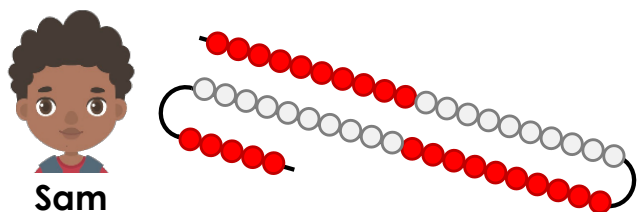


is equal to

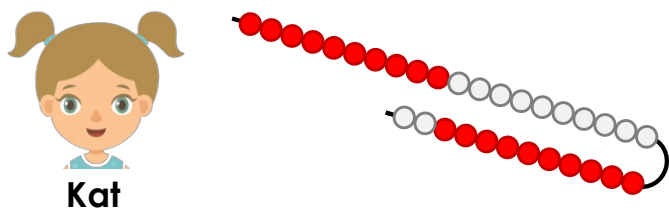


VF
HW/Ext

2. Complete the statements to compare the groups of objects.



A. has the most.


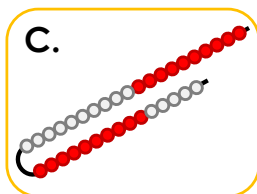

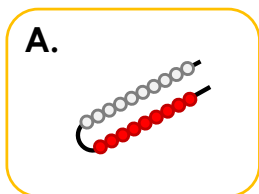


B. is less than .



VF
HW/Ext

3. Use the cards below to complete the statement.



_____ is more than _____



Find 3 possibilities.









RPS
HW/Ext

Compare Objects Within 50

4. Use the symbols $>$, $<$ and $=$ to make each statement correct.

A.   thirty-six

B.   

C.   




VF
HW/Ext

5. Complete the statements to compare the groups of objects.



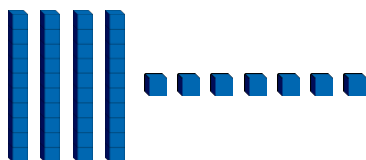
Willow



A. Willow has . Theo has .



Theo




B. is more than .

C. has the most.

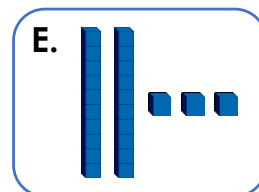
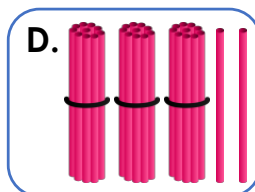



VF
HW/Ext

6. Use the cards below to complete the statement.



B. twenty-seven



_____ $>$ _____

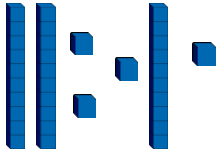
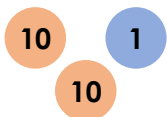



Find 3 possibilities.


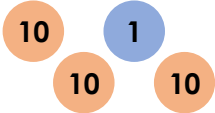

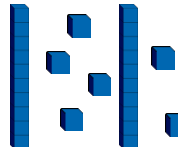


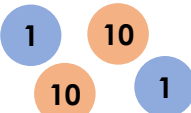



RPS
HW/Ext

Compare Objects Within 50

7. Use the symbols $>$, $<$ and $=$ to make each statement correct.

A.      three tens
two ones

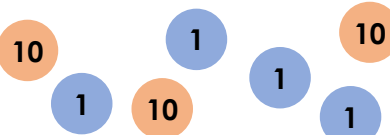
B. four tens
six ones    


C.     $20 + 5$




VF
HW/Ext

8. Complete the statements to compare the amounts.


Tia


Lily


Tom

I have three tens and six ones.

A. Tia has . Lily has .
Tom has .


B. $<$ $<$

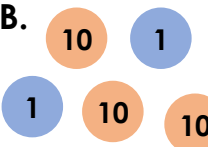
C. has the most.




VF
HW/Ext

9. Use the cards below to complete the statement.

A. 

B. 

C. 

D. $40 + 7$

E. forty-two

$>$ $>$

Find 3 possibilities.



RPS
HW/Ext

Homework/Extension

Compare Objects Within 50

Developing

1. A. is less than; B. is more than; C. is equal to
2. A. Sam has the most; B. 32 is less than 45
3. Various answers, for example: E is more than A; D is more than B; C is more than E

Expected

4. A. $>$; B. $=$; C. $<$
5. A. Willow has 39. Theo has 47; B. 47 is more than 39; C. Theo has the most.
6. Various answers, for example: $D > B$; $E > C$; $A > E$

Greater Depth

7. A. $>$, $<$; B. $>$, $>$; C. $<$, $=$
8. A. Tia has 34. Lily has 35. Tom has 36; B. 34 $<$ 35 $<$ 36; C. Tom has the most.
9. Various answers, for example: $D > E > A$; $C > E > B$; $D > C > E$