

# Compare Numbers Within 50

1. Use the cards to complete the number statements.

A. 25  37

is more than

B. 22  21

is less than

C. 40  39



25	26	27	28	29	30	31	32	33	34	35	36	37	38	39	40
----	----	----	----	----	----	----	----	----	----	----	----	----	----	----	----

VF  
HW/Ext

2. Draw lines to connect the numbers and symbols to make comparison statements.

41

is more than

45

34

is less than

30

3  
tens

is equal to

40



30	31	32	33	34	35	36	37	38	39	40	41	42	43	44	45
----	----	----	----	----	----	----	----	----	----	----	----	----	----	----	----

VF  
HW/Ext

3. Find three ways to complete the comparison statement using the cards below.

is more than

20

24

29

21

35



20	21	22	23	24	25	26	27	28	29	30	31	32	33	34	35
----	----	----	----	----	----	----	----	----	----	----	----	----	----	----	----

RPS  
HW/Ext

# Compare Numbers Within 50

4. Use  $<$ ,  $>$  or  $=$  to complete the number statements.

A. nineteen



45

1	2	3	4	5	6	7	8	9	10
11	12	13	14	15	16	17	18	19	20
21	22	23	24	25	26	27	28	29	30
31	32	33	34	35	36	37	38	39	40
41	42	43	44	45	46	47	48	49	50

B. 37



20

C. 18



eighteen



VF  
HW/Ext

5. Draw lines to connect the numbers and symbols to make comparison statements.

27

=

36

thirty  
-two

<

twenty-  
seven

50


>

49




VF  
HW/Ext

6. Find three ways to complete the comparison statement using the cards below.



>



20

48

33

29

41



RPS  
HW/Ext

# Compare Numbers Within 50

7. Use  $<$ ,  $>$  or  $=$  to complete the number statements.

A. two tens and three ones

23

1	2	3	4	5	6	7	8	9	10
11	12	13	14	15	16	17	18	19	20
21	22	23	24	25	26	27	28	29	30
31	32	33	34	35	36	37	38	39	40
41	42	43	44	45	46	47	48	49	50

B. thirty

29

C. 15

four tens and nine ones



VF  
HW/Ext

8. Draw lines to connect the numbers and symbols to make comparison statements.

fifteen

=

4 tens  
9 ones

40

<

33

3 tens  
3 ones

>

39



VF  
HW/Ext

9. Find three ways to complete the comparison statement using the cards below.

>

<

22

2 tens  
4 ones

39

4  
tens

19



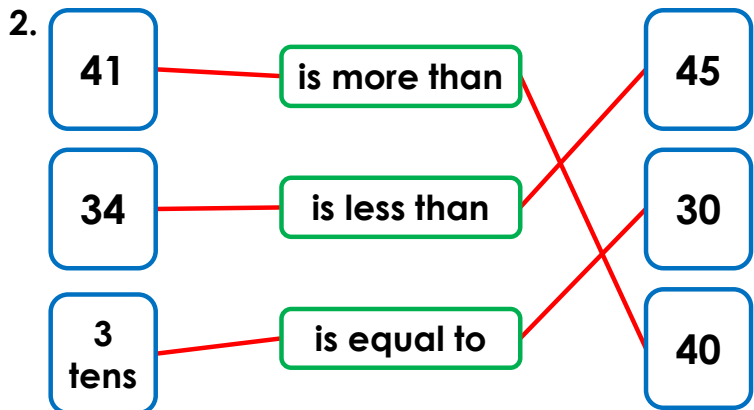
RPS  
HW/Ext

# Homework/Extension

## Compare Numbers Within 50

### Developing

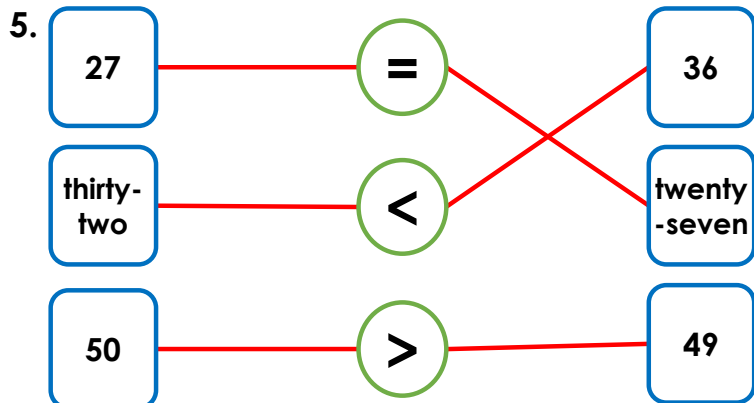
1. A. is less than; B. is more than; C. is more than



3. Various answers, for example: 35 is more than 20; 29 is more than 24; 24 is more than 20.

### Expected

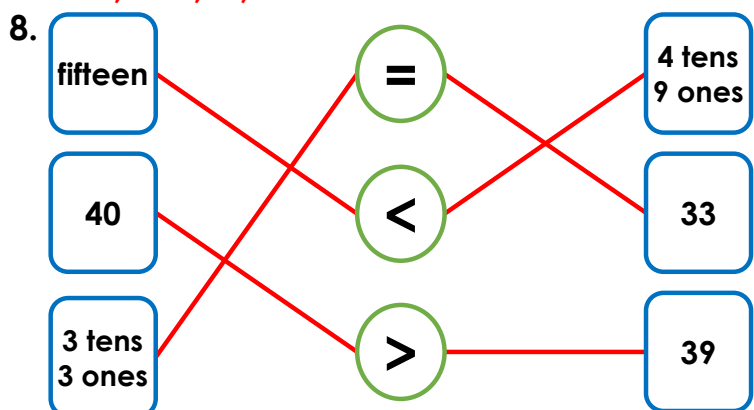
4. A. <, B. >, C. =



6. Various answers, for example:  $48 > 29$ ;  $33 > 20$ ;  $48 > 41$

### Greater Depth

7. A. =, B. >, C. <



9. Various answers, for example: 2 tens 4 ones  $> 22 < 4$  tens;  $39 > 19 < 22$ ;  $4$  tens  $> 19 < 22$