



Compare and Order Lengths and Mass

Pig



Length: 200cm
Height: 110 cm
Weight: 350 kg
Top Speed: 18 km/h

Lion




Length: 250cm
Height: 120cm
Weight: 190kg
Top Speed: 80 km/h

Cheetah



Length: 150cm
Height: 94cm
Weight: 72kg
Top Speed: 120km/h

Horse



Length: 240cm
Height: 180cm
Weight: 1000kg
Top Speed: 88km/h

Anaconda



Length: 880 cm
Height: 15cm
Weight: 227kg
Top Speed: 32km/h

Bison




Length: 280cm
Height: 195cm
Weight: 620kg
Top Speed: 56km/h

Wolf



Length: 160cm
Height: 85cm
Weight: 80kg
Top Speed: 60 km/h

Hippo



Length: 520cm
Height: 150cm
Weight: 1800kg
Top Speed: 30 km/h

Compare and Order Lengths and Mass

1. Which is the longest animal?

2. Which is the tallest animal?

3. Which is the shortest (height) animal?

4. Which is the heaviest animal?

5. Which is the lightest animal?

6. Which are the three fastest animals?

7. Which animal has the lowest number in 2 separate categories?

8. Can you put the animals in order from the shortest to the tallest?

shortest

--	--	--	--



--	--	--	--

tallest

9. Use < or > to show which card would win.

Top Speed		
lion		anaconda

Height		
bison		wolf

Weight		
hippo		lion

Length		
wolf		horse

Height		
pig		cheetah

Top Speed		
anaconda		hippo

Compare and Order Lengths and Mass

Answers

- Which is the longest animal?
anaconda
- Which is the tallest animal?
bison
- Which is the shortest (height) animal?
anaconda
- Which is the heaviest animal?
hippo
- Which is the lightest animal?
cheetah
- Which are the three fastest animals?
cheetah, horse, lion
- Which animal has the lowest number in 2 separate categories?
cheetah
- Which animal has the lowest number in 2 separate categories?

anaconda	wolf	cheetah	pig
lion	hippo	horse	bison

- Use < or > to show which card would win.

Top Speed		
lion	>	anaconda

Height		
bison	>	wolf

Weight		
hippo	>	lion

Length		
wolf	<	horse

Height		
pig	>	cheetah

Top Speed		
anaconda	>	hippo