
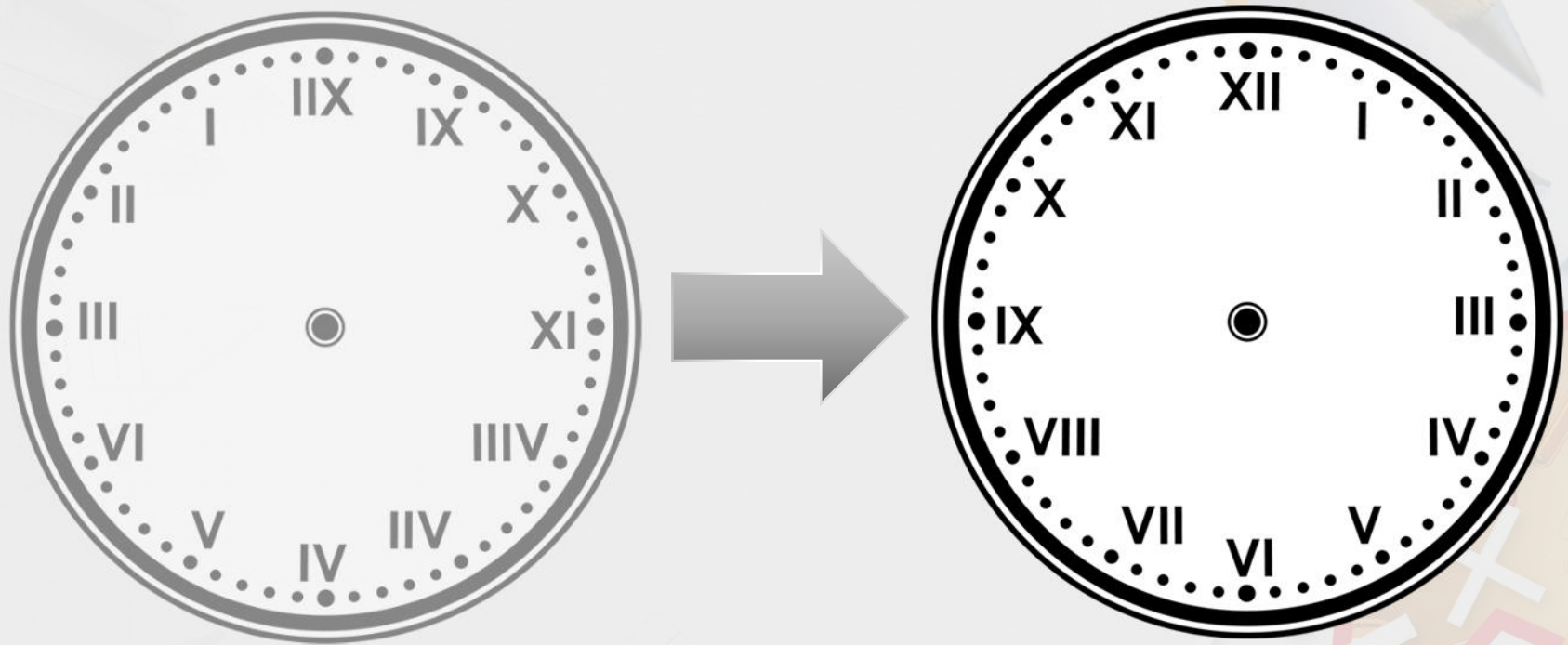


# Telling the Time to the Minute

**What time is shown on the clock?**  
**HINT: Look closely at the Roman numerals...**



**What time is shown on the clock?**  
**HINT: Look closely at the Roman numerals...**



**It shows five minutes to five.**  
**The clock face was reversed, as if it was reflected in a mirror.**

What time is shown on the clock?






What time is shown on the clock?



**Twenty-three minutes past two**

Find the correct time shown on the clock.



**Twenty-nine minutes  
to 3**

**Nine minutes to 6**

**Eleven minutes past 6**

Find the correct time shown on the clock.



Twenty-nine minutes  
to 3

Nine minutes to 6

✓  
Eleven minutes past 6

**True or false?**

**At eleven minutes past six, the minute hand is pointing between the two and the three.**



True or false?

At eleven minutes past six, the minute hand is pointing between the two and the three.


True



Match the clocks to the correct statement.



A



B



C

1. Fourteen minutes past twelve

☐

2. Three minutes past three

☐

3. Eighteen minutes past three

☐

Match the clocks to the correct statement.



A



B



C

1. Fourteen minutes past twelve

B

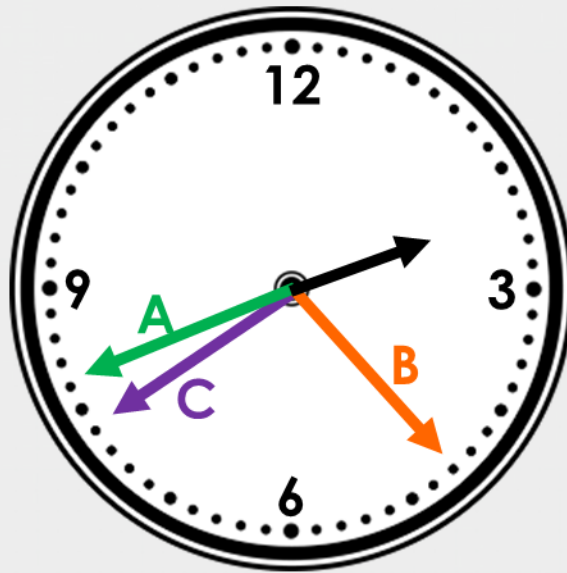
2. Three minutes past three

A

3. Eighteen minutes past three

C

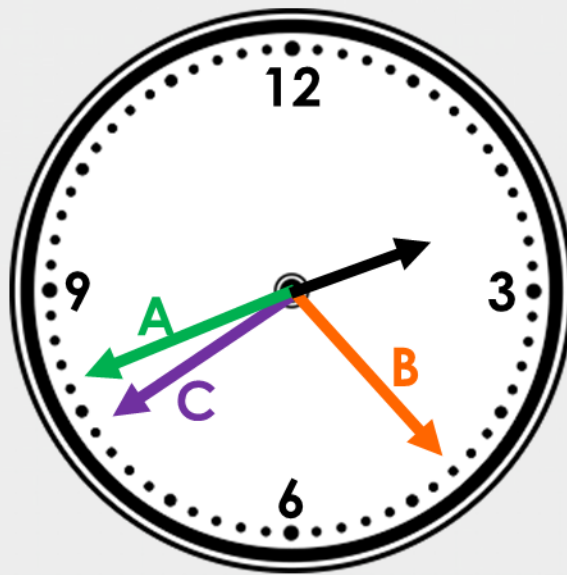
The time is twenty-one minutes to three.  
Which arrow is the correct minute hand?



Explain why.



The time is twenty-one minutes to three.  
Which arrow is the correct minute hand?

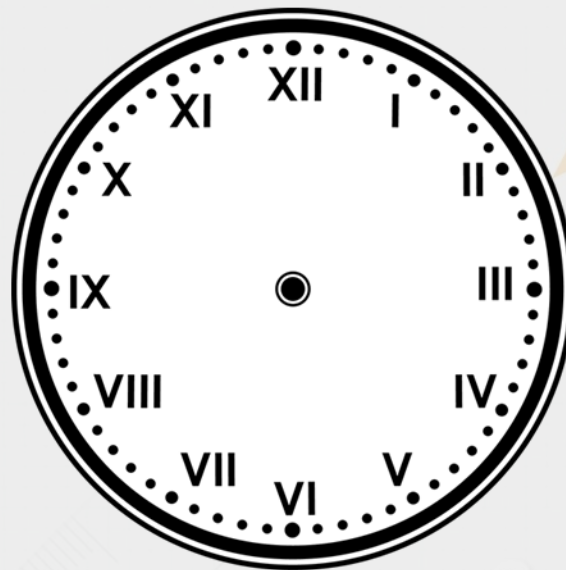


Explain why.

**C because it is 'to' the hour so the minute hand is after the 6 and there are 21 minutes until the minute hand gets to the twelve for the next hour.**

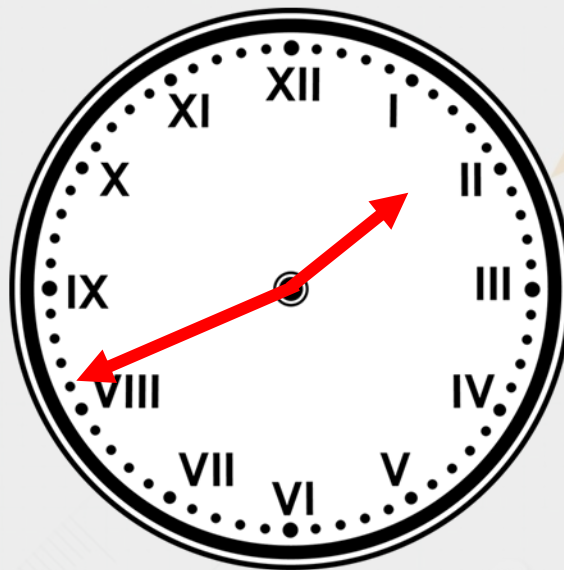
**It takes Amit 36 minutes to drive to the shops.  
He sets off from home at five past one.  
What time does he get to the shops?**

**Where would the hands be on the clock  
at the time he arrives at the shops?**



**It takes Amit 36 minutes to drive to the shops.  
He sets off from home at five past one.  
What time does he get to the shops?**

**Where would the hands be on the clock  
at the time he arrives at the shops?**



**He arrives at the shops at nineteen minutes to two.**