


Telling the Time to the Minute


1a. What time is shown on the clock?



VF

Telling the Time to the Minute

1b. What time is shown on the clock?



VF

2a. Tick the correct time shown on the clock.



Seven minutes to 10

Eight minutes past 1

Twelve minutes to two



VF

2b. Tick the correct time shown on the clock.



Five past 11


Six minutes to 5

Four minutes to 5




VF

3a. Draw hands on the clock so that it reads twenty-two minutes past three.



VF

3b. Draw hands on the clock so that it reads eleven minutes to one.



VF

4a. True or false?

At twenty-two minutes past three, the minute hand is pointing between the three and the four.



VF

4b. True or false?


At 8 minutes past one, the minute hand is pointing between the one and the two.



VF

Telling the Time to the Minute


5a. What time is shown on the clock?



VF


Telling the Time to the Minute

5b. What time is shown on the clock?



VF

6a. Tick the correct time shown on the clock.



Twenty-one minutes past 6


Twenty-eight minutes to 4

Twenty-one minutes past 7



VF

6b. Tick the correct time shown on the clock.



Nineteen minutes to 2

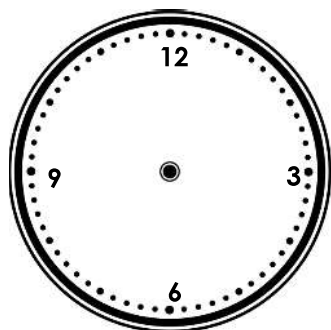
Eleven minutes past eight.

Forty minutes past 2



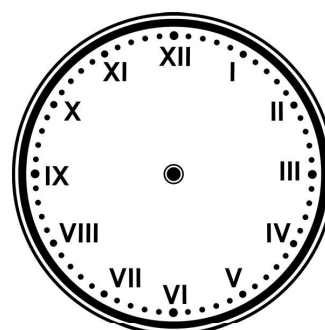
VF

7a. Draw hands on the clock so that it reads four minutes past eight.



VF

7b. Draw hands on the clock so that it reads thirteen minutes to five.



VF

8a. True or false?

At twenty-three minutes to eleven, the minute hand is pointing between the seven and the eight.



VF

8b. True or false?

At seventeen minutes past ten, the minute hand is pointing between the four and the five.

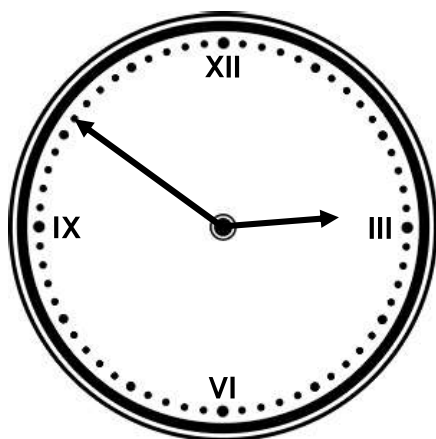


VF

Telling the Time to the Minute

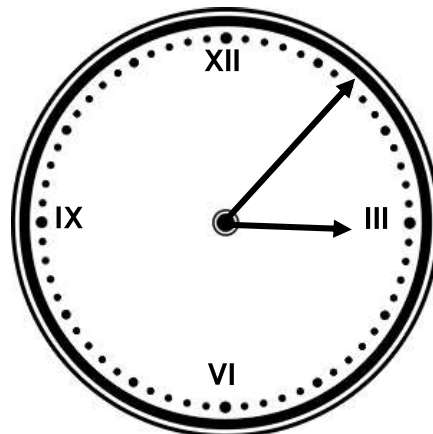
Telling the Time to the Minute

9a. What time is shown on the clock?




VF

9b. What time is shown on the clock?



VF

10a. Tick the correct time shown on the clock.



Nine minutes to ten


Nine minutes to two

Nine minutes past ten



VF

10b. Tick the correct time shown on the clock.



Twenty-four minutes to 9

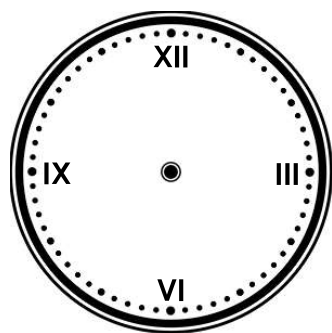
Twenty-four minutes past 9

Fourteen minutes to five



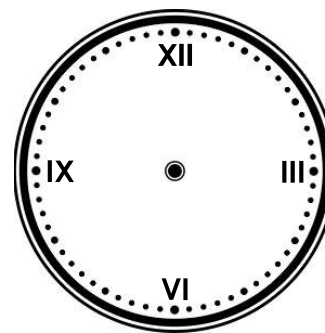
VF

11a. Draw hands on the clock so that it reads twenty-seven minutes past ten.



VF

11b. Draw hands on the clock so that it reads six minutes to two.



VF

12a. True or false?

At nine minutes past six, the minute hand is pointing between the twelve and the one.



VF

12b. True or false?

At thirteen minutes to ten, the minute hand is pointing between the nine and the ten.



VF

Varied Fluency
Telling the Time to the Minute

Developing

- 1a. 18 minutes past 12
2a. Twelve minutes to 2
3a.



- 4a. False, it would be between 4 and 5.

Expected

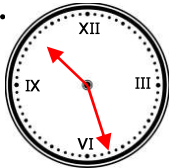
- 5a. 28 minutes to 11 or 32 minutes past 10.
6a. Twenty-one minutes past 6
7a.



- 8a. True

Greater Depth

- 9a. 9 minutes to 3 or 51 minutes past 2
10a. Nine minutes past ten
11a.



- 12a. False, it would be between 1 and 2.

Varied Fluency
Telling the Time to the Minute

Developing

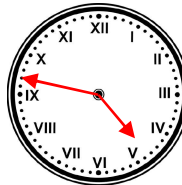
- 1b. 14 minutes to 3 or 46 minutes past 2.
2b. Four minutes to 5
3b.



- 4b. True

Expected

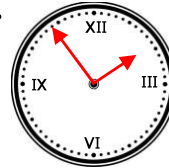
- 5b. 3 minutes past 11
6b. Eleven minutes past 8
7b.



- 8b. False, it would be between 3 and 4.

Greater Depth

- 9b. 7 minutes past 3
10b. Twenty-four minutes past 9
11b.



- 12b. True