



Map Co-ordinates



Which area of the world would you be in if you were at the following co-ordinates:

20°S 80°E

40°N 20°W

60°N 40°E

40°S 0°W

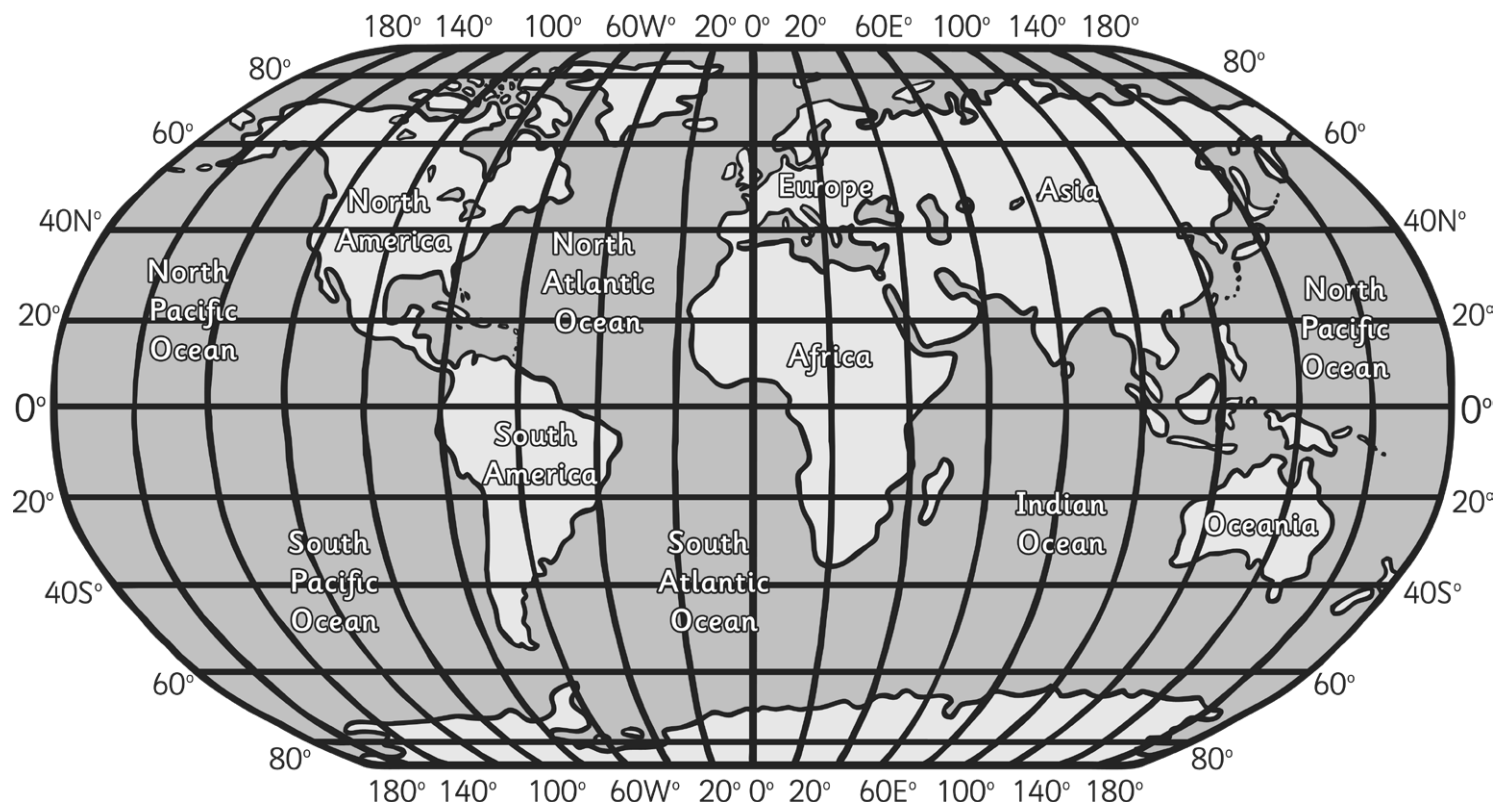
40°N 100°E

20°N 160°E

20°N 20°E

60°S 140°W

30°S 140°E

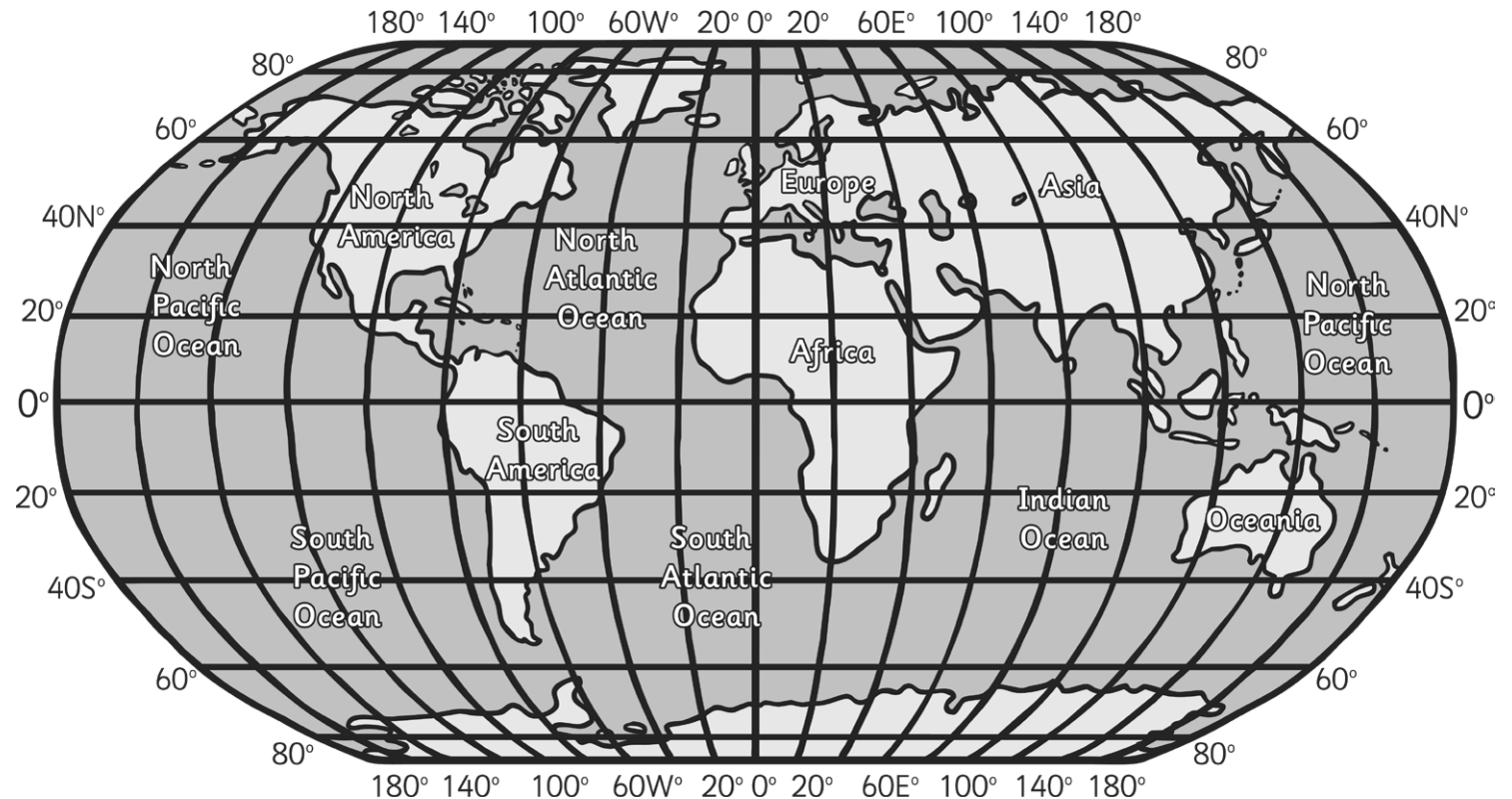




Map Co-ordinates Answers

Which area of the world would you be in if you were at the following co-ordinates:

20°S 80°E	Indian Ocean
40°N 20°W	North Atlantic Ocean
60°N 40°E	Europe
40°S 0°W	South Atlantic Ocean
40°N 100°E	Asia
20°N 160°E	North Pacific Ocean
20°N 20°E	Africa
60°S 140°W	South Pacific Ocean
30°S 140°E	Oceania





Map Co-ordinates



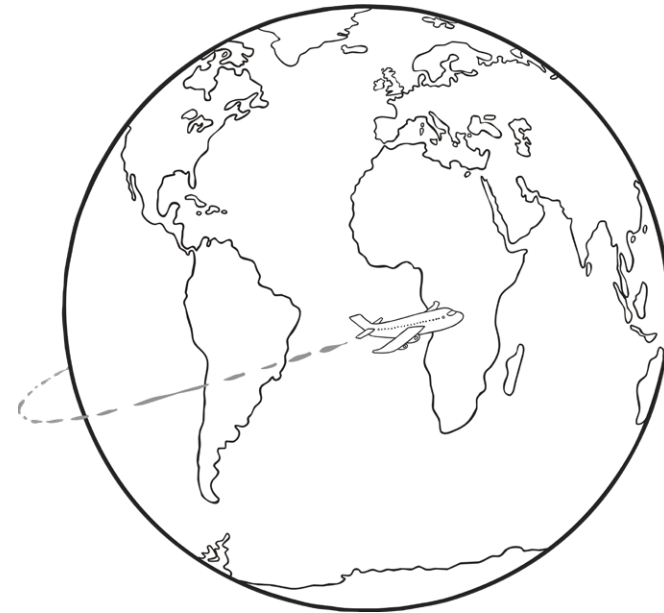
Which country of the world would you be if you found yourself at the following co-ordinates?

Countries:

20°N 100°W	___	○	___	___	___	___
20°N 80°E	___	○	___	___	___	___
40°N 100°E	___	___	___	___	○	___
20°S 60°W	___	○	___	___	___	___
80°N 40°W	___	___	___	___	○	___
20°S 40°W	___	___	○	___	___	___
0°N 40°E	___	○	___	___	___	___
60°N 120°W	___	___	___	○	___	___
20°S 30°E	___	___	___	___	○	___
50°N 100°E	___	___	○	___	___	___

Write down the circled letters in each country answer:

Unscramble the letters to make the name of another country:





Map Co-ordinates Answers

Countries:

20°N 100°W M(e)xico

20°N 80°E I(n)dia

40°N 100°E Chin(a)

20°S 60°W P(a)raguay

80°N 40°W Green(l)and

20°S 40°W Bra(z)il

0°N 40°E K(e)nya

60°N 120°W Cana(d)a

15°S 40°E Zimbab(w)e

50°N 100°E Mo(n)golia

Write down the circled letters in each country answer:

E N A A L Z E D W N

Unscramble the letters to make the name of another country:

N E W / Z E A L A N D





Map Co-ordinates Answers

Countries:

50°N 30°E Ukrai(n)e

40°N 30°E Tu(r)key

42°N 15°E I(t)aly

Cities:

50°N 19°E Kr(a)kow

51°N 0°E (L)ondon

60°N 25°E (H)elsinki

49°N 2°E Pari(s)

Other places:

38°N 18°E Me(d)iterranea(n) / Sea

43°N 35°E Black / S(e)a

46°N 10°E Th(e) Alps

Write down the circled letters in each answer:

N R T A L H S D N E E

Unscramble the letters to make the
name of a country in Europe:

N E T H E R L A N D S

Can you estimate the
co-ordinates of its capital city?

52 °N 5 °E