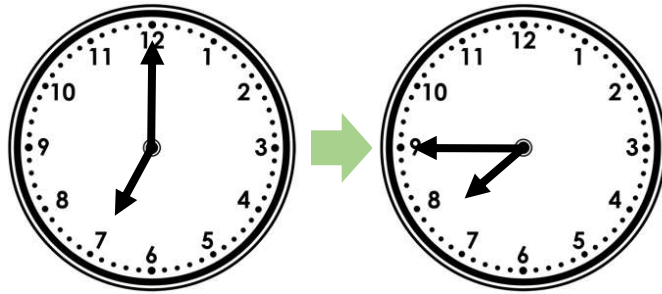


Find Durations of Time


Find Durations of Time

1a. How much time has passed?



VF

1b. How much time has passed?



VF

2a. How much time has passed?



VF

2b. How much time has passed?



VF

3a. A dance performance starts at quarter past 11 and lasts for 15 minutes.

Circle the time it finishes.

Quarter to 11

Quarter to 12

Half past 11



VF

3b. A train journey starts at 10 o'clock and lasts for 45 minutes.

Circle the time it finishes.

Quarter to 11

Half past 10

20 minutes to 11



VF

4a. Kendra started painting at quarter to 2. She finished at 2 o'clock.

Circle the duration that she painted for.

5 minutes

10 minutes

15 minutes

20 minutes



VF

4b. Aston started reading at quarter past 9. He finished reading at quarter to 10.

Circle the duration that he read for.

15 minutes

20 minutes

30 minutes

45 minutes




VF

Find Durations of Time

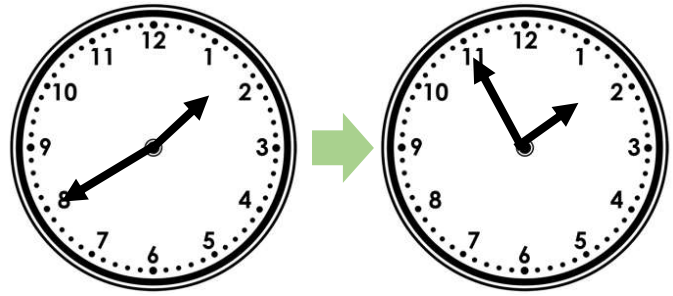
Find Durations of Time

5a. How much time has passed?



VF

5b. How much time has passed?



VF

6a. How much time has passed?



VF

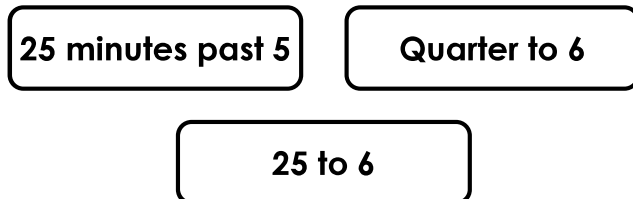
6b. How much time has passed?



VF

7a. A show starts at 20 minutes past 5 and lasts for 25 minutes.

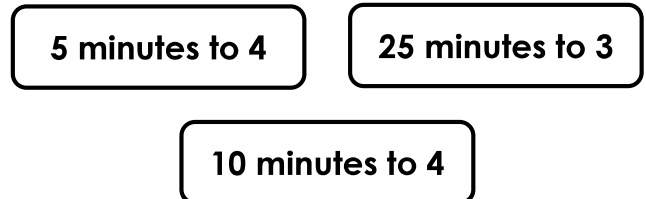
Circle the time it finishes.



VF

7b. A bus journey starts at 10 minutes past 3 and lasts for 45 minutes.


Circle the time it finishes.



VF

8a. Raj started running at 25 minutes past 12 and finished running at 10 minutes to 1.


Circle the duration that he ran for.



VF

8b. Sue started swimming at 25 minutes to 7 and finished swimming at 5 minutes to 7.

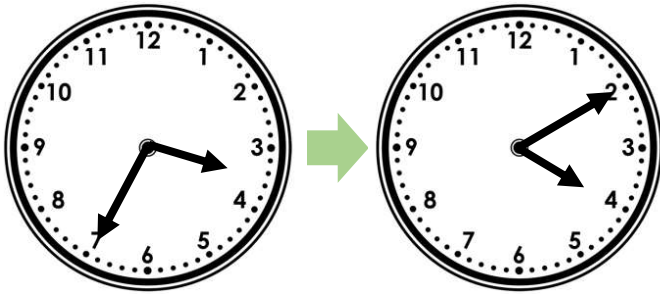
Circle the duration that she swam for.



VF

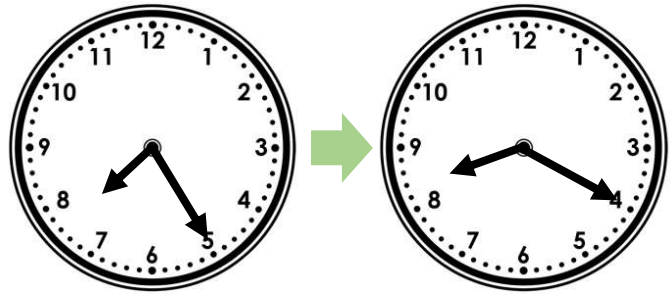
Find Durations of Time

9a. How much time has passed?



VF

9b. How much time has passed?



VF

10a. How much time has passed?

25 minutes past 2



Quarter past 3



VF

10b. How much time has passed?

10 minutes to 7



5 minutes to 8



VF

11a. A play starts at quarter to 10 and lasts for 55 minutes.

Circle the time it finishes.

Half past 10

20 minutes to 11

10 minutes to 11



VF

11b. A plane journey starts at 25 minutes past 1 and lasts for 1 hour and 10 minutes.

Circle the time it finishes.

25 minutes to 2

25 minutes to 3

Half past 2



VF

12a. Stan started a jigsaw at quarter to 5 and finished at 10 minutes past 6.

Circle the duration that he did the jigsaw for.

1 hour and 20 minutes

1 hour and 25 minutes

1 hour and 30 minutes

1 hour and 35 minutes



VF

12b. Alf started gardening at 5 minutes to 12 and finished at 25 minutes past 1.

Circle the duration that he was gardening for.

1 hour and 20 minutes

1 hour and 25 minutes

1 hour and 30 minutes

1 hour and 35 minutes



VF

Varied Fluency
Find Durations of Time

Developing

- 1a. 45 minutes
- 2a. 30 minutes
- 3a. Half past 11
- 4a. 15 minutes

Expected

- 5a. 30 minutes
- 6a. 40 minutes
- 7a. Quarter to 6
- 8a. 25 minutes

Greater Depth

- 9a. 35 minutes
- 10a. 50 minutes
- 11a. 20 minutes to 11
- 12a. 1 hour and 25 minutes

Varied Fluency
Find Durations of Time

Developing

- 1b. 15 minutes
- 2b. 30 minutes
- 3b. Quarter to 11
- 4b. 30 minutes

Expected

- 5b. 15 minutes
- 6b. 35 minutes
- 7b. 5 minutes to 4
- 8b. 20 minutes

Greater Depth

- 9b. 55 minutes
- 10b. 1 hour and 5 minutes or 65 minutes
- 11b. 25 minutes to 3
- 12b. 1 hour and 30 minutes