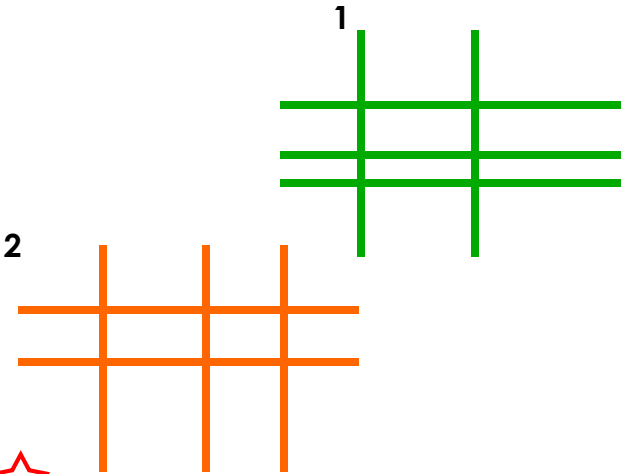


Horizontal and Vertical

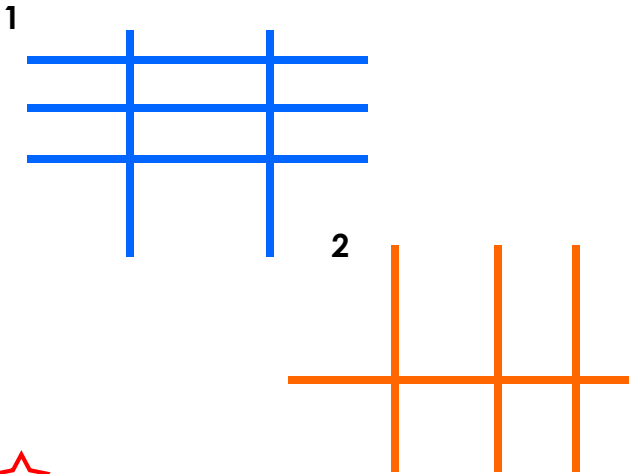
1a. Which of the images below has the most vertical lines?



VF

Horizontal and Vertical

1b. Which of the images below has the most horizontal lines?



VF

2a. Fill in the table below.

Flag	Horizontal or vertical lines?



VF


2b. Fill in the table below.

Flag	Horizontal or vertical lines?



VF

3a. Which of these flags has a vertical line of symmetry?



VF

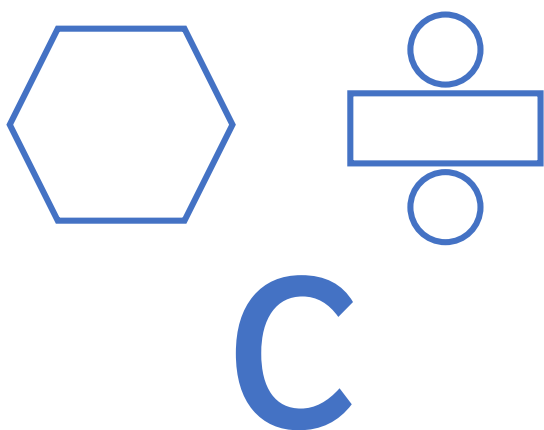
3b. Which of these flags has a horizontal line of symmetry?



VF

## Horizontal and Vertical

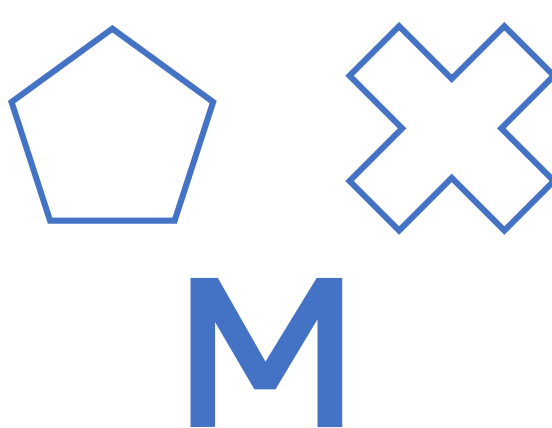
4a. Draw the horizontal lines of symmetry in these objects.



VF





## Horizontal and Vertical

4b. Draw the vertical lines of symmetry in these objects.



VF





5a. Fill in the table below.

Shape	Type of lines – horizontal, vertical or both?
A 	
B 	
C 	
D 	



VF

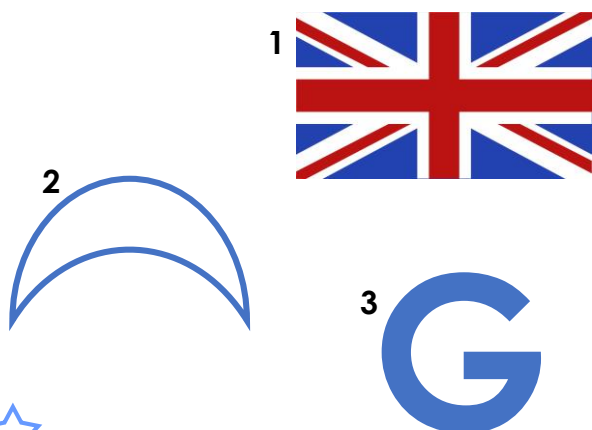
5b. Fill in the table below.

Shape	Type of lines – horizontal, vertical or both?
A 	
B 	
C 	
D 	



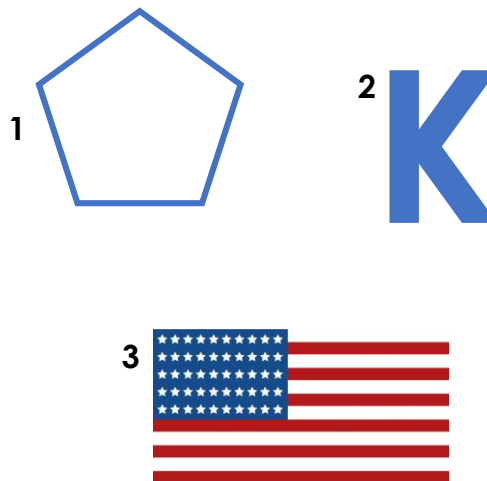
VF

6a. Which of the images below has a vertical line of symmetry?



VF

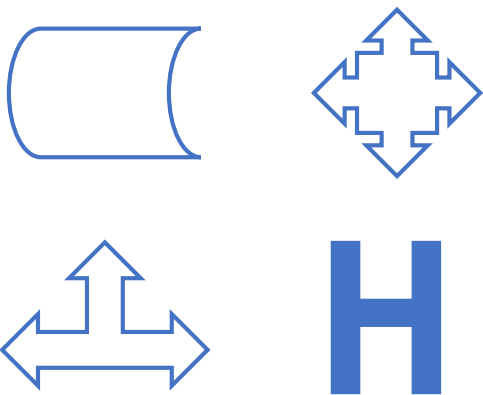
6b. Which of the images below has a horizontal line of symmetry?



VF

## Horizontal and Vertical


7a. Draw the horizontal and vertical lines of symmetry in these objects



VF

## Horizontal and Vertical

7b. Draw the horizontal and vertical lines of symmetry in these objects.



VF

8a. Fill in the table below.

Shape	Type of lines – horizontal, vertical, both or neither?
A	
B	
C	
D	



VF

8b. Fill in the table below.

Shape	Type of lines – horizontal, vertical, both or neither?
A	
B	
C	
D	



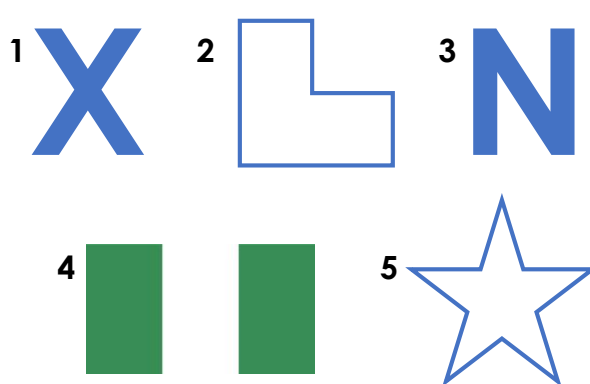
VF

9a. Which of the images below has a vertical and a horizontal line of symmetry?



VF

9b. Which of the images below has a vertical and a horizontal line of symmetry?



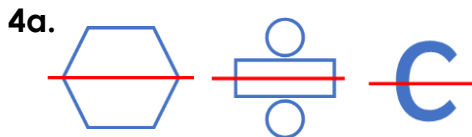
VF

## Varied Fluency Horizontal and Vertical

### Developing

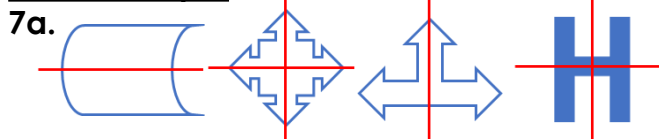
- 1a. **2**  
2a. **Vertical; Horizontal**  
3a. **1**

### Expected



- 5a. **A – both, B – vertical, C – horizontal, D – both**  
6a. **2**

### Greater Depth



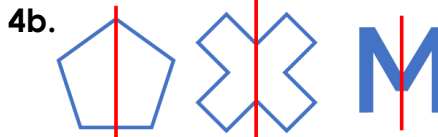
- 8a. **A – both, B – vertical, C – horizontal, D – neither**  
9a. **4**

## Varied Fluency Horizontal and Vertical

### Developing

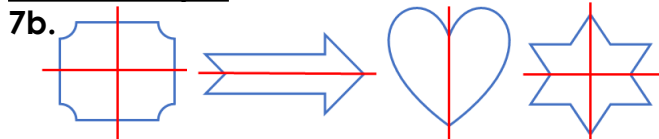
- 1b. **1**  
2b. **Horizontal; Vertical**  
3b. **2**

### Expected



- 5b. **A – horizontal, B – horizontal, C – vertical, D – both**  
6b. **2**

### Greater Depth



- 8b. **A – both, B – neither, C – both, D – vertical**  
9b. **1 and 4**