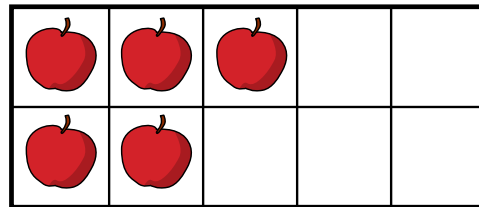



Tens and ones



I a) How many apples are there?



There is ten and ones.

There are apples.

b) How many bees are there?




There is ten and ones.

There are bees.



- 2 Draw counters to show 1 ten and 3 ones.

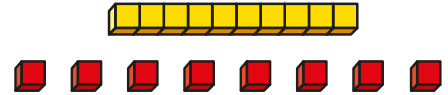


1 ten and 3 ones is equal to

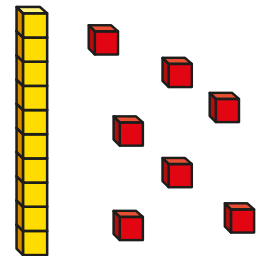


- 3 Match the number sentences to the pictures.

1 ten and 7 ones



1 ten and 1 one



1 ten and 8 ones

