


## 3.2.21

I can recognise pounds and pence and  
calculate the total amount of money.

# Starter - Recognising the value of coins and notes.




# Starter - Recognising the value of coins and notes.

£5

2p

10p


£10



£2

1p

50p




£20





20p

£1

5p



Put these coins and notes in order from largest value to smallest value.



# How much money have I got?



## **TOP TIP!**

Find the money with the greatest value first and add those.

Then you can add the smaller coins.

REMEMBER we can group coins together to make counting them quicker.

# How much money have I got?



Step 1 – Order the money

$$\text{£}5 + \text{£}1 + 50\text{p} + 20\text{p} + 2\text{p}$$

Step 2 – Add the easiest values first.

$$= \text{£}6 + 70\text{p} + 2\text{p}$$

Step 3 - Find the total

$$= \text{£}6 \text{ and } 72 \text{ pence}$$

# How much money have I got? – Your turn



Step 1 – Order the money

Step 2 – Add the easiest values first.

Step 3 - Find the total

# How much money have I got? – Your turn



Step 1 – Order the money

$$\text{£}5 + \text{£}2 + 20\text{p} + 5\text{p} + 2\text{p}$$

Step 2 – Add the easiest values first.

$$= \text{£}7 + 20\text{p} + 7\text{p}$$

Step 3 - Find the total

$$= \text{£}7 \text{ and } 27 \text{ pence}$$

# Task 1

Write in the correct symbol (< > =) to make the calculations below correct.



**£1.57**



**£1.10**

**£2.12**



Write in the correct symbol (< > =) to make the calculations below correct.



**£1.57**




**£1.10**

**£2.12**

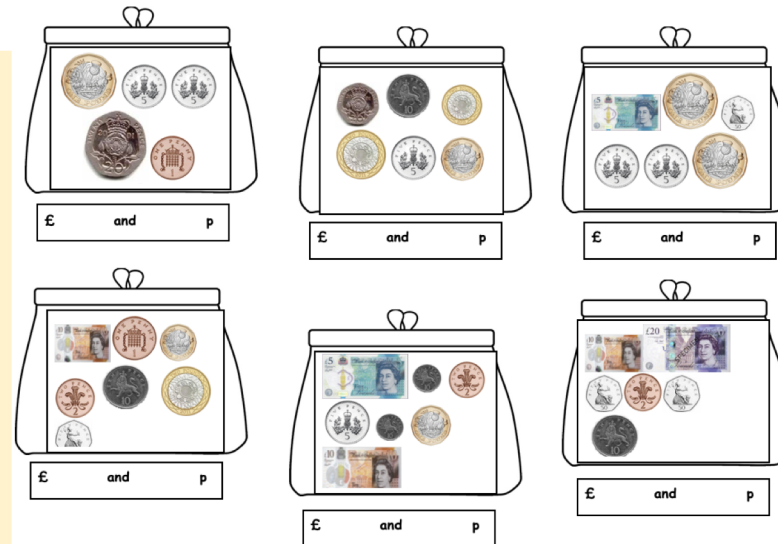


# All the activities are uploaded on the online learning page.

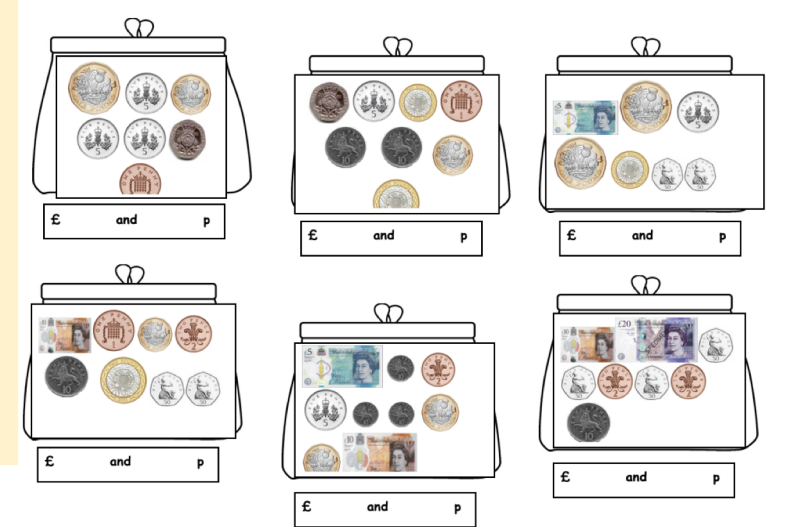
\*I can use £ and p correctly.



\*\* I can use £ and p correctly.



\*\*\*I can use £ and p correctly.



Please choose one activity to complete today.