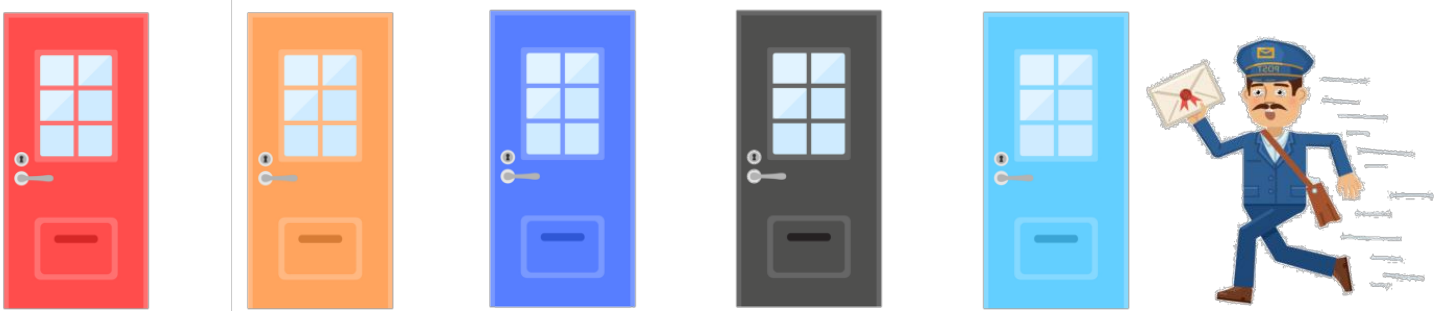


Numbers to 50

1. Postman Percy is delivering mail. He always likes to start at the highest numbered house. He delivers one letter to each house.



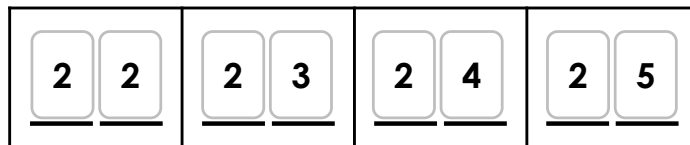

The first house number is less than 45 but more than 35. He delivers 5 letters. What house number does he end on?



Explore all possibilities.

DP

2. Sally is counting forwards within 50. She uses the digit cards below to create 2-digit numbers for a number track.



Investigate the different ways she can complete the number track using the digit cards. You can use each digit card more than once.

DP

Numbers to 50

1. Postman Percy is delivering mail. He always likes to start at the highest numbered house. He delivers one letter to each house.



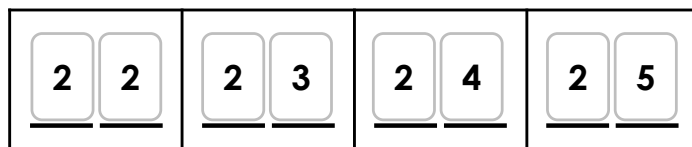


The first house number is less than 45 but more than 35. He delivers 5 letters. What house number does he end on?



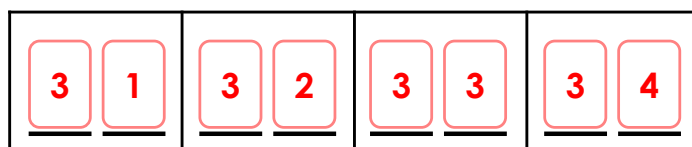
Explore all possibilities. **Various answers, for example: He starts at house number 37 and delivers letters to numbers 37, 36, 35, 34 and 33. He ends on house number 33.**

DP

2. Sally is counting forwards within 50. She uses the digit cards below to create 2-digit numbers for a number track.



Investigate the different ways she can complete the number track using the digit cards. You can use each digit card more than once.



Various answers, one example given above.

DP