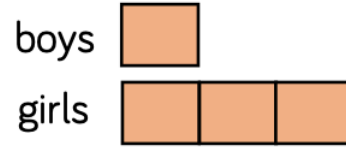
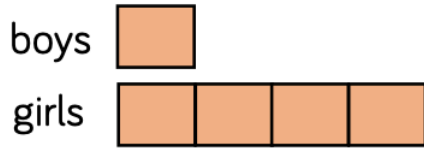



In a playground there are 3 times as many girls as boys.



Which bar model represents the number of boys and girls?
Explain your choice.

Draw a bar model to represent this situation.

In a car park there are 5 times as many blue cars as red cars.

Eva has these counters 

Amir has 4 times as many counters.
How many counters does Amir have?