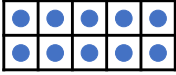
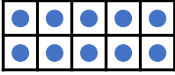
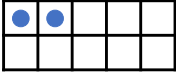

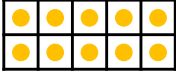
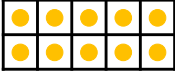
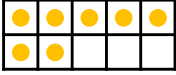








Numbers to 50

1. Which numbers are represented below?

A.    = 

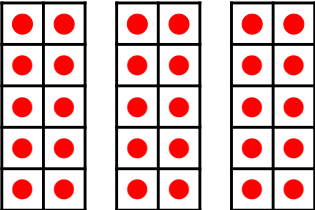
B.    = 

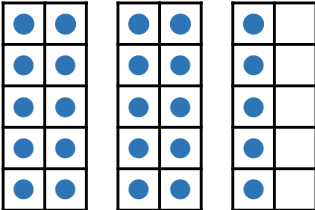
C.    = 

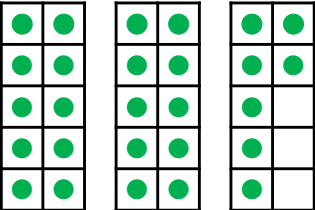


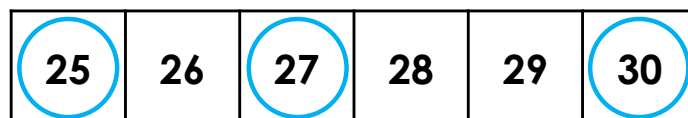
VF
HW/Ext

2. Draw a line from each representation to its number on the track.

A. 

B. 

C. 



VF
HW/Ext

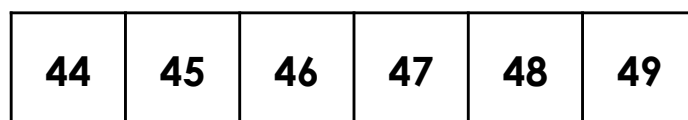
3. Zack is thinking of a number.

He has written 3 clues.

There are 4 groups of 10.

It is more than 45.

It is less than 48.




What number might Zack be thinking of? List all possibilities.



RPS
HW/Ext

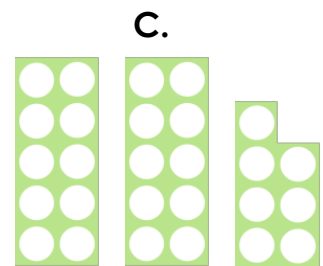
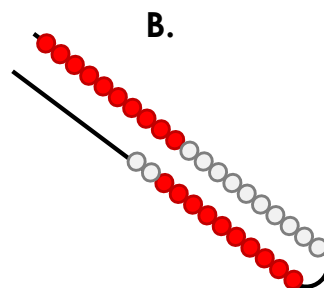
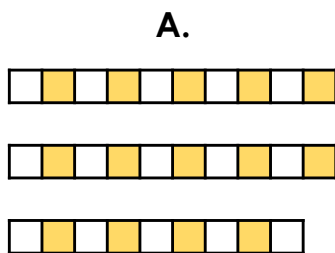
Numbers to 50

4. Which numbers are represented below?



VF
HW/Ext

5. Draw a line from each representation to its number on the track.



25	26	27	28	29	30	31	32	33
----	----	----	----	----	----	----	----	----



VF
HW/Ext

6. Freddie is thinking of a number.

He has written 3 clues.

If I count from 26 to 34, I will say the number.

There are 3 groups of 10.

It is less than 33.

26	27	28	29	30	31	32	33	34
----	----	----	----	----	----	----	----	----


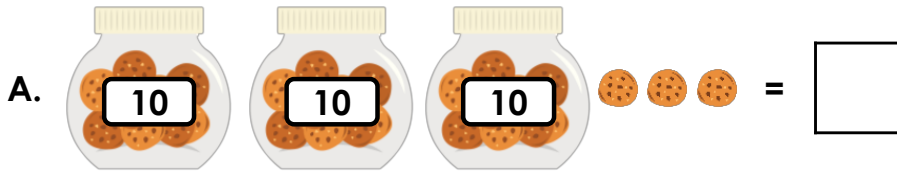
What number might Freddie be thinking of? List all possibilities.



RPS
HW/Ext

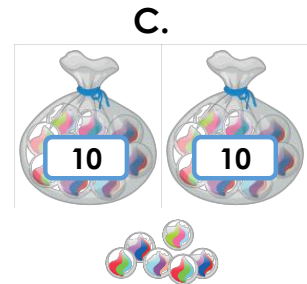
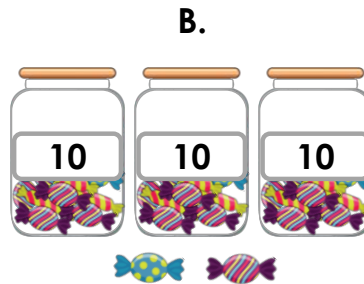
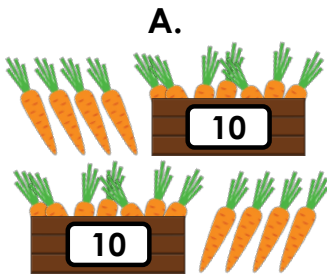
Numbers to 50

7. Which numbers are represented below?



VF
HW/Ext

8. Complete the number track and draw a line from each representation to the correct numeral.



								34
--	--	--	--	--	--	--	--	----



VF
HW/Ext

9. Hannah is thinking of a number.

She has written 3 clues.

If I count from 37 to 48, I will say the number.

There are 4 groups of 10.

The second digit is higher than the first digit.

What number might Hannah be thinking of? List all possibilities.



RPS
HW/Ext

Homework/Extension

Numbers to 50

Developing

1. A. 42; B. 27; C. 35
2. A. 30; B. 25; C. 27
3. Zack could be thinking of numbers 46 or 47.

Expected

4. A. 43; B. 31; C. 26
5. A. 29; B. 32; C. 27
6. Freddie could be thinking of the numbers 30, 31 or 32.

Greater Depth

7. A. 33; B. 21; C. 44
8. A. 28; B. 32; C. 26

<u>26</u>	27	<u>28</u>	29	30	31	<u>32</u>	33	34
-----------	----	-----------	----	----	----	-----------	----	----

9. Hannah could be thinking of the numbers 45, 46, 47 or 48.